

SPRING TEST

NAME _____

Directions: Write your answer for each question.


1. What are the next three numbers in this pattern?

2, 4, 6, 8, _____, _____, _____

2. What two days come next after Wednesday?

Tuesday, Wednesday, _____, _____

3. Look at the bees. How many are there? _____



4.  +  = _____

5. Tina picked 23 carrots from the garden. She ate 4 carrots.
Write a number sentence to find how many carrots she had left.

6. How many 10s are there in 145?

7. What is 76 rounded to the nearest 10? _____

NAME _____

8. What is the value of these coins? _____



9. How many minutes are in one half hour? _____

11. What month comes next after April? _____

12. What are the next two numbers in this pattern?

25, 50, _____, _____

13. Lita bought a pack of gum for 15¢. She gave the clerk a quarter. How much change should she get?

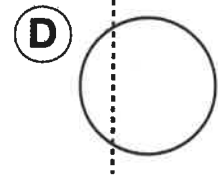
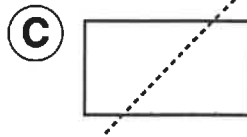
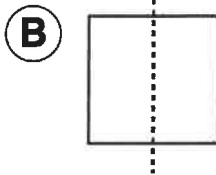
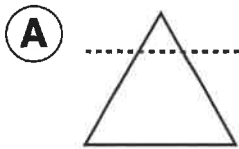
14. Write one way to make 62¢. You may use quarters, dimes, nickels, and pennies.

15. A pet store has 19 white gerbils and 14 black gerbils. How many gerbils are there in all?

NAME _____

Directions: Choose the best answer to each question.
Mark your answer.

16. Which shape shows a line of symmetry through it?




18. Look at the thermometer.
What temperature is shown?

(A) 30°F

(C) 50°F

(B) 40°F

(D) 60°F



19. Which of these is true?

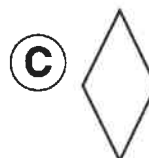
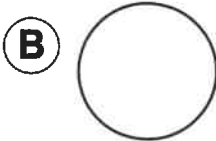
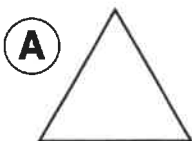
(A) $35 > 33$

(C) $44 < 40$

(B) $60 > 65$

(D) $55 > 59$

20. Which shape is a quadrilateral?



NAME _____

21. $56 =$

(A) $40 + 6$

(C) $50 + 60$

(B) $50 + 16$

(D) $50 + 5 + 1$

22. Marta has 68 red beads and 89 yellow beads.
About how many beads does she have in all?

(A) 80

(B) 120

(C) 160

(D) 200

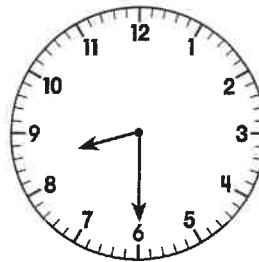
23. What time is shown on the clock?

(A) 9:30

(C) 7:30

(B) 8:30

(D) 6:30



24. About how many units long is the snake?

(A) 5

(B) 10

(C) 15

(D) 20



25. Look at the graph. It shows children's favorite kinds of sandwiches. How many children like tuna fish best?

(A) 3

(B) 4

(C) 5

(D) 6

